
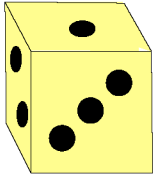


Hidden Spots



These two dice are being put together so that 6 spots will be hidden between them.

Can you do that another way?



What other totals can you make?

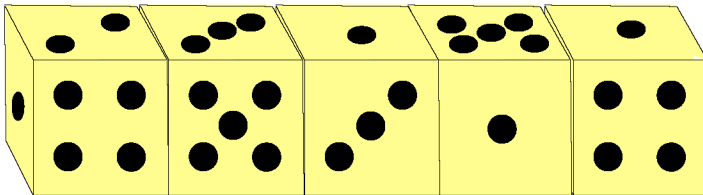
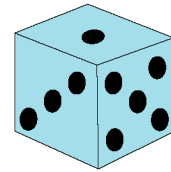
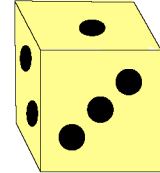

What is the highest total and what is the lowest total you can make?

Now these three dice are being put together.
How many spots will be hidden between them?

Can you make the same total in another way?

What other totals can you make?

What is the highest total and what is the lowest total you can make with 3 dice?



What is the total of spots on top of these dice?

What is the total of spots on the bottom of them?

Try making different totals with the five dice.